

E-



Learning/ Snow Day BINGO!



Fourth Grade Snow Day BINGO

This year some of our snow days will be counted as "E-Learning Days". On these specific snow days, students will be expected to complete a "BINGO" on the board by completing one activity from each Column. Students may get a BINGO by going ACROSS ONLY. Each E-learning day we have students will need to complete different tasks. PLEASE KEEP THIS CARD IN A SAFE PLACE AS IT WE BE USED FOR UP TO 2 E-LEARNING DAYS. Parents, please sign off on each BINGO card saying your child completed the activities.


Students: Once you finish an activity, lightly color in the square.

All students need to complete a BINGO on EACH E-Learning day. BINGO cards are due the day after the E-Learning day. Cards & created materials need to be returned to school completed & signed by a parent/guardian the day after the E-Learning Day. Students who do not finish a BINGO card will have to complete it during school hours.

Please let me know if you have any questions.

Thank you,

Mr. Kix



W

WRITING/SPELLING

Write a letter to a relative or friend.

Write your spelling words 3 times each

Play a game or take a practice test on Spelling city.

Complete a writing prompt from the attached page.

A

ACTIVITY/ART

Do chores around the house and color it.

Draw a picture of your house

Play outside in the snow!

Make a craft

R

READING/GRAMMAR

Read a book for 45 minutes total.

Explain a problem that you have had and then explain the solution you had.

Compare and contrast 2 things in your home.

Choose 2 IXL reading topics and get a 90 smart score on them.

M

MATH

Practice Math fact flash cards.

Choose 2 IXL Math topics and get a 90 smart score on them

Pick A math activity attached

Make your own math worksheet.

S

SOCIAL/SCIENCE

Watch or listen to the weather and write down 5 weather words.

Name 2 places in the United States that you would like to visit and tell why

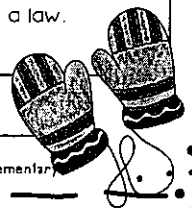
Name an animal that you would see in MN write how it has adapted to the climate.

Create a bill that you think should turn into a law.

Parent/Guardian Signature: _____

Date: _____

©Elevating in Elementary

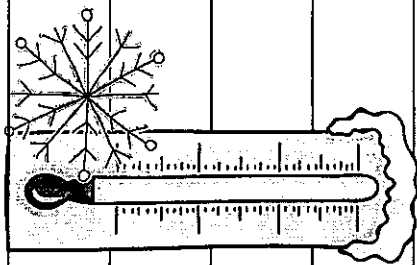
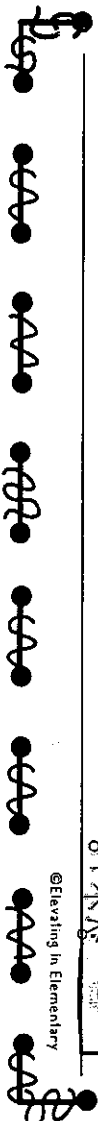
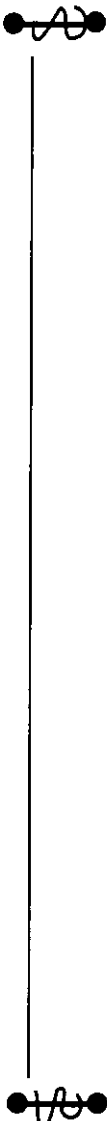


WRITING PROMPTS

Directions: Read through the writing prompts, pick your favorite one. Once you have a topic picked write 1 or more paragraphs (3-5 sentences) using your best writing skills. Don't forget the details!

1. What would you do if you won the lottery?
2. Write a story in which you are a mini marshmallow in a cup of hot chocolate.
3. Write about a memory that makes you happy.
4. Describe someone who is a hero to you and explain why.
5. Write a poem about the snow, cold, winter, snowflakes, and/or ice.
6. What is your favorite part about winter and why?





©Elevating in Elementary

Math Activities

1. John paints pictures and sells them at art shows. He charges \$56.25 for a large painting. He charges \$25.80 for a small painting. Last month he sold six large paintings and three small paintings. How much did he make in all? Show your work and label your answer.
2. On Thursday the Meat Locker sold 210 pounds of ground beef. On Friday they sold twice that amount. On Saturday they only sold 130 pounds. How much more meat did they sell on Friday than Saturday? Show your work and label your answer.

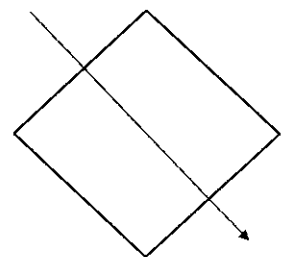
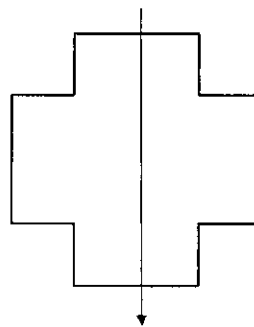
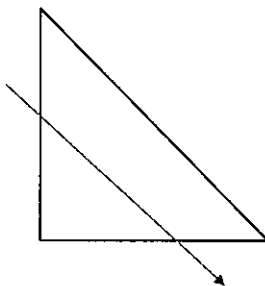
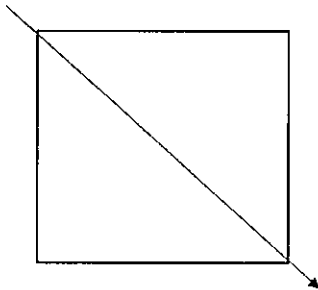
Math Activities

1. Order the numbers from least to greatest.

1. 3.4 3.14 3.04 4.4 4.03

2. .35 3.5 .53 .3 .05

Write yes if the line of symmetry is correct and no if it is incorrect.



Math Activities

1. Order the numbers from least to greatest.

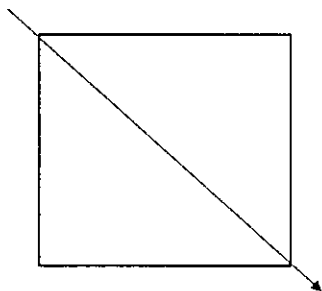
1. 3.4 3.14 3.04 4.4 4.03

2. 3.04 3.14 3.4 4.03 4.4

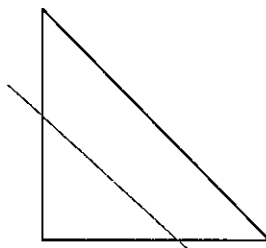
3. .35 3.5 .53 .3 .05

4. 0.05 0.3 0.35 0.53 3.5

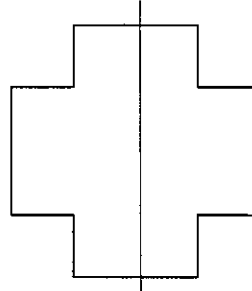
Write yes if the line of symmetry is correct and no if it is incorrect.



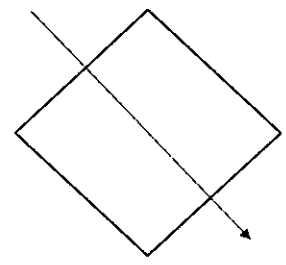
YES



NO



YES



YES

Math Activities

1. John paints pictures and sells them at art shows. He charges \$56.25 for a large painting. He charges \$25.80 for a small painting. Last month he sold six large paintings and three small paintings. How much did he make in all? Show your work and label your answer.

1. **\$414.90**

2. On Thursday the Meat Locker sold 210 pounds of ground beef. On Friday they sold twice that amount. On Saturday they only sold 130 pounds. How much more meat did they sell on Friday than Saturday? Show your work and label your answer.

1. **290 pounds**